



5-6 YEARS | WEEK 44

Math - Everyday Maths

1. Pick And Circle - Left Or Right

2. Position of Coaches - Ordinal Numbers

3. Cut and Paste - Ordinal Numbers

4. Everyday Math - Positions

5. Everyday Math - Maze

6. Clock - Tell The Time

7. Clock - Match The Time

8. Everyday Math - Time

9. Shadow Matching - Dinos

10. Shadow Matching - Vehicles

11. Pattern - Shapes

12. Colour - Shapes

13. Pattern - Odd One Out

14. Pattern - Draw Shapes

15. What Comes Next - Shapes Patterns

16. What Comes Next - Colours Patterns

17. Puzzles - Pattern

18. What Comes Next - Number

19. What Comes Next - Alphabets

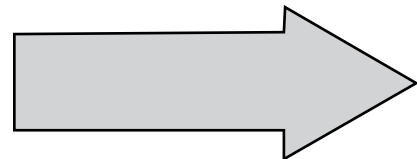
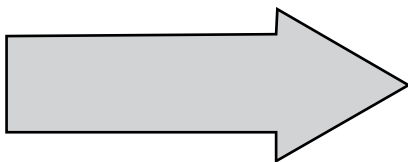
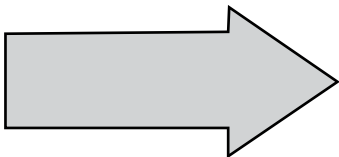
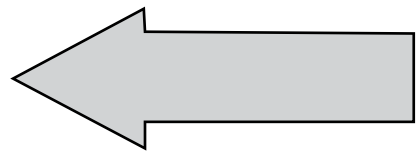
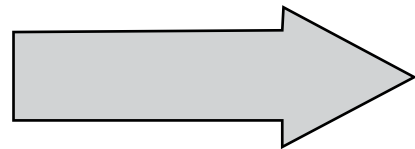
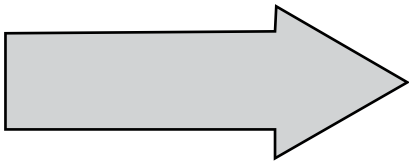
20. Count And Match - Numbers



Pick and Circle



Chutki is confused between left and right! Help her circle all the arrows pointing to the right.





Find the Position



Bheem's friends are coming by a train.

Write the position of the coaches of Bheem's friends in the space given below.



help box

second fourth first sixth third eighth
fifth tenth seventh ninth



is in the

coach.



is in the

coach.



is in the

coach.



is in the

coach.



is in the

coach.



is in the

coach.



is in the

coach.



is in the

coach.



is in the


coach.













Cut and paste



Look at the order below and cut out the ordinal number and paste it next to the correct animal.



1st

2nd

3rd

4th

5th

6th

7th

8th

9th

10th

Access 12,000+ expert-designed worksheets

Subscribe Now!

[Explore all Math worksheets](#)