



6-7 YEARS | WEEK 15

Math - Arithmetic Problems

1. What is the value of?

2. What is the value of?

3. Match the expressions

4. What is the value of?

5. Let's follow the maze and compute!

6. Let's follow the maze and compute!

7. Choose and circle - Word problems

8. Choose and circle - Word problems

9. What is the correct number?

10. What is the correct number?

11. What is the correct number?

12. What is the correct number?

13. What is the correct number?

14. What is the correct number?

15. What is the correct number?

16. What is the correct number?

17. Introduction to Zero

18. Addition

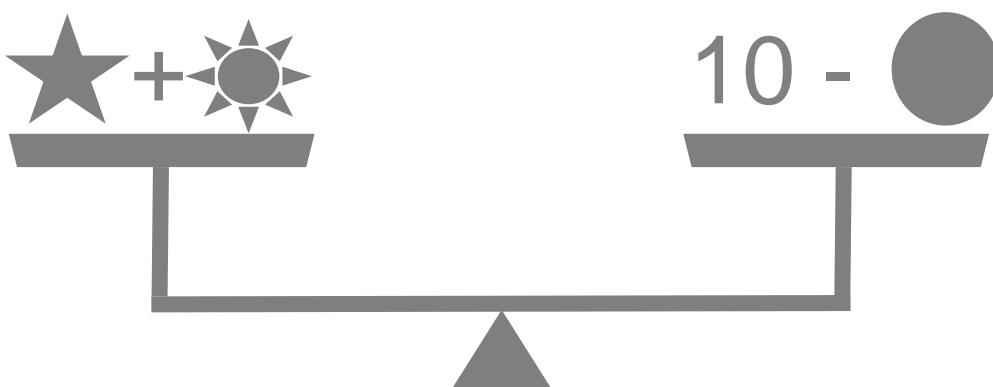
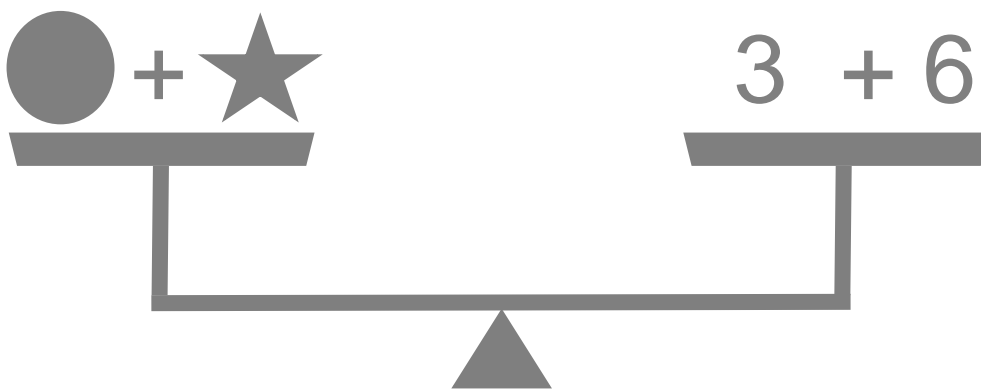
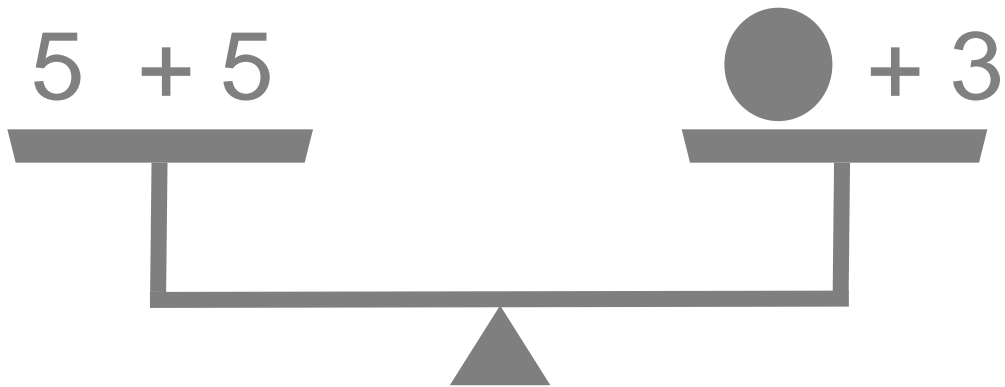
19. Subtraction

20. Verbal problems - Addition & subtraction



WHAT IS THE VALUE OF?

Balance out both sides of the balancing pan and find the value of shapes or objects given.

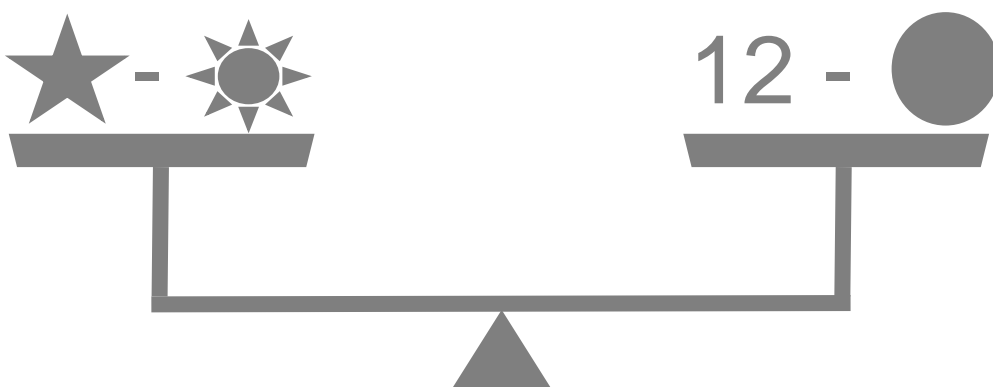
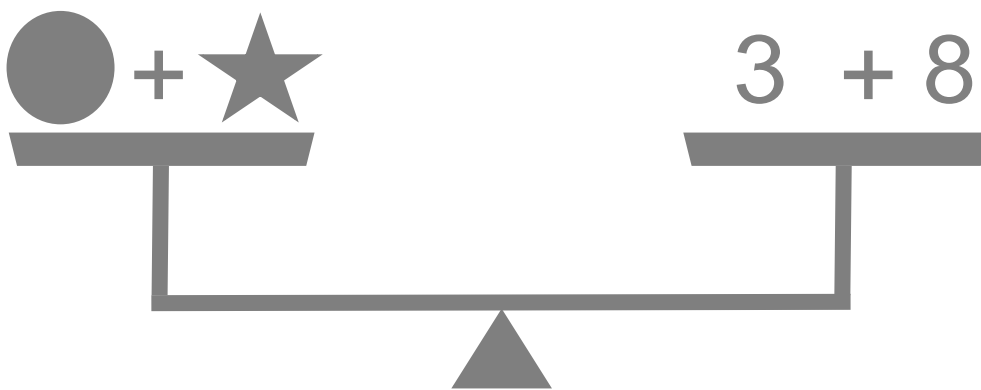
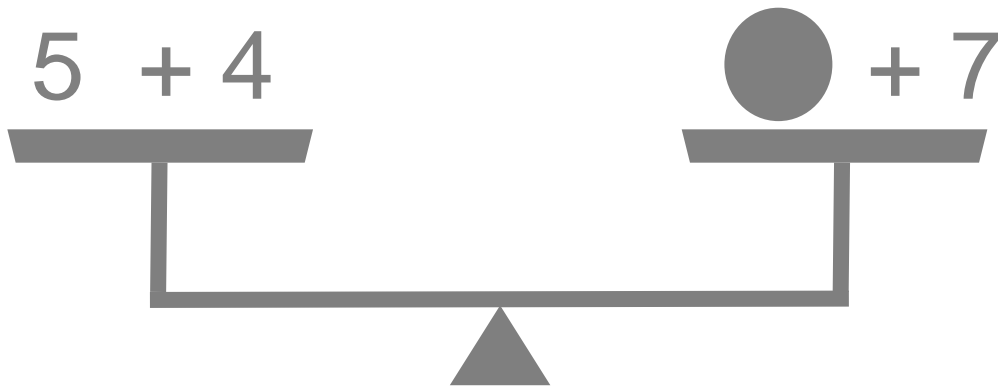


$$● + ☀ + ★ =$$



WHAT IS THE VALUE OF?

Balance out both sides of the balancing pan and find the value of shapes or objects given.



$$● + ☀ + ★ =$$



MATCH THE EXPRESSIONS

Expressions in column-1 match the expressions of column-2 and 3. Solve each expression and match them with expressions of the same solutions. One has been completed for you.

$6+5-2$

$10-4+1$

$12-7+9$

$4+6+2$

$5+1-4$

$12+6-3$

$1+2+4$

$8+7-3$

$8+2-3$

$3+0+5$

$12+5+3$

$5+3+3$

$6+3+2$

$8+4+2$

$10-6+5$

$10-5+2$

$1+3+4$

$10-2+12$

$5+5+4$

$2+3+2$

$11-6+7$

$15-5+5$

$5+3+1$

$6+1-5$

$1+1+0$

$3+7+5$

$6-1+2$

$9+5+6$

$7+6-2$

$13-6+1$

Access 12,000+ expert-designed worksheets

Subscribe Now!

[Explore all Math worksheets](#)