



9-10 YEARS | WEEK 16

Science-Biology Body

1. Can you label it- Tooth

2. Complete the incomplete- Teeth chart

3. Match- Organs

4. Pick and label- Circulatory system

5. Fill and complete- Digestive system

6. Cut and paste- Parts of the body

7. Complete it!- Teeth set

8. Organ systems

9. Teeth

10. Label- Digestive system

11. Crossword- Teeth

12. Organ system

13. Think and answer- Teeth

14. Our organs

15. Our teeth

16. Digestive system

17. Teeth

18. Choose and tick

19. Food we eat

20. Food we eat



Can you label it



Label the structure of the tooth with the help of the clues given in the clouds.

pulp

blood vessels
and nerves

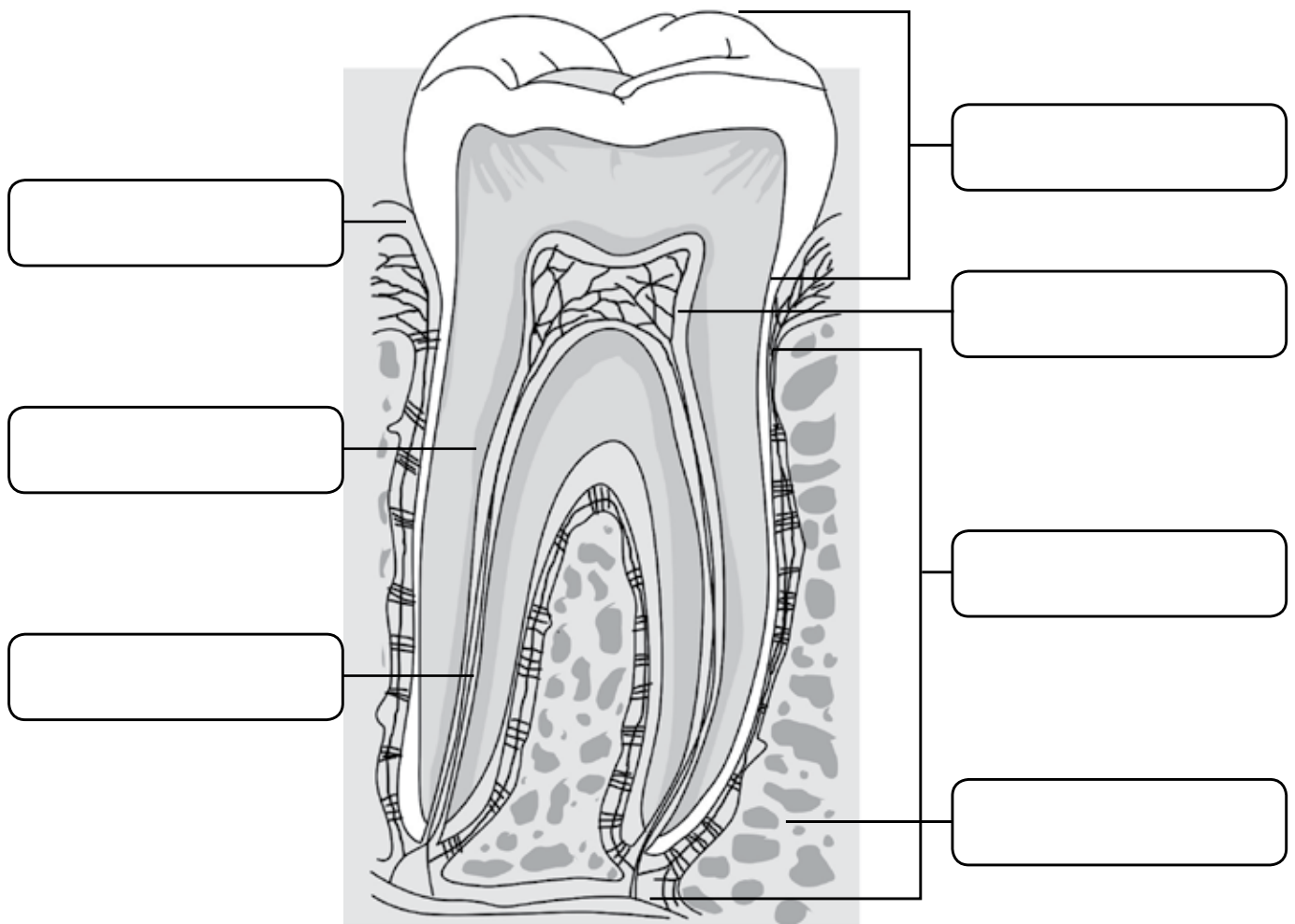
bone

dentin

enamel

root canal

gum










Complete the incomplete



Complete the given human adult teeth chart.

Types of teeth	Number of teeth	
	Upper jaw	Lower jaw
incisors 	four	
canines 		two
premolars 		
molars 		two
wisdom teeth 		
total number of teeth in each jaw		
Total number of teeth in both jaws		



Match



Match the following body organs with their function:

Organ

Function

1.



a. Pumps blood to all parts of our body

2.



b. Breathe in oxygen and breathe out carbon dioxide

3.



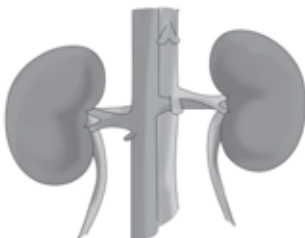
c. Digestion of food takes place

4.



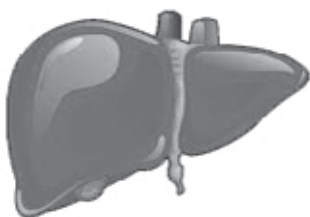
d. Controls all our actions

5.



e. Makes urine

6.



f. Eliminates toxins from the blood supply of the body

Access 12,000+ expert-designed worksheets

Subscribe Now!

[Explore all Science worksheets](#)