



# 6-7 YEARS | WEEK 23

## Math - Everyday Math

---

1. Maths & me

---

2. Map reading - Animal kingdom

---

3. Map reading - Clothes

---

4. Map reading - Feast time

---

5. Map reading - Placing at co-ordinates

---

6. Map reading - Placing at co-ordinates

---

7. Map reading - Guess the message

---

8. Map reading - Match the locations

---

9. Map reading - Treasure hunt

---

10. Describe the attributes

---

11. Fill - Missing numbers

---

12. Fill - Before a number

---

13. Fill - After a number

---

14. Fill - Between two numbers

---

15. Comparison of numbers

---

16. Daily Math - Number stories

---

17. Daily Math - Estimating

---

18. Daily Math - Beat the calculator

---

19. Daily Math - Time

---

20. Daily Math - Connect 4



# MATHS & ME

I am \_\_\_\_\_ years old  
I was born on \_\_\_\_\_/\_\_\_\_\_/\_\_\_\_\_  
My favourite number is \_\_\_\_\_

My First Name \_\_\_\_\_  
I have \_\_\_\_\_ letters in my first name.

My Last Name \_\_\_\_\_  
I have \_\_\_\_\_ letters in my last name.

I am in Grade \_\_\_\_\_  
I have \_\_\_\_\_ friends.

I have \_\_\_\_\_ family members.  
Number of Men \_\_\_\_\_  
Number of Women \_\_\_\_\_  
Number of Children \_\_\_\_\_  
Number of Pets \_\_\_\_\_  
I have \_\_\_\_\_ rooms in my home.







I have \_\_\_\_\_ teeth now.  
I am \_\_\_\_\_ cms tall.  
My weight is \_\_\_\_\_ kgs.  
I am starting this workbook on  
\_\_\_\_\_/\_\_\_\_\_/\_\_\_\_\_

I wake up at \_\_\_\_\_ : \_\_\_\_\_  
I go to sleep at \_\_\_\_\_ : \_\_\_\_\_



## MAP READING - Animal Kingdom

A position is defined by its horizontal & vertical directions. Can you help finding positions of the following animals. One has been completed for you.

|   |   |  |   |  |   |
|---|---|--|---|--|---|
| 5 |  |  |   |  |    |
| 4 |   |  |   |  |   |
| 3 |   |  |   |  |   |
| 2 |   |  |   |  |  |
| 1 |   |  |  |  |   |
|   | A   | B  | C   | D  | E   |

ALLIGATOR

C1

MONKEY

ZEBRA

BATS







TURTLE

GIRAFFE



## MAP READING - Clothes

A position is defined by its horizontal & vertical directions. Can you help finding positions of the following clothes. One has been completed for you.

|   |   |   |   |  |   |
|---|---|---|---|--|---|
| 5 |    |   |   |  |   |
| 4 |   |  |   |  |   |
| 3 |   |   |   |  |   |
| 2 |   |   |  |  |   |
| 1 |  |   |   |  |  |
|   | A   | B   | C   | D  | E   |

CAP

GLOVES

PANTS

FROCK

SHOES

SKIRT

**Access 12,000+ expert-designed worksheets**

**Subscribe Now!**

[Explore all Math worksheets](#)