



5-6 YEARS | WEEK 15

Maths - Numbers 1

1. Trace and Compare - Numbers

2. Complete the Incomplete - Names 1

3. Complete the Incomplete - Names 2

4. Complete the Incomplete - Missing Number

5. Pick and Write - Smallest Number

6. Pick and Write - Smallest and Largest

7. Pick and Write - Largest

8. Pick and color - Number 25

9. Pick and color - Number 26

10. Pick and color - Number 27

11. Pick and color - Number 28

12. Pick and color - Number 29

13. Pick and color - Number 30

14. Count and write - Backward numbers

15. Write the number - Number Sequencing 1

16. Write the number - Number Sequencing 2

17. Write the number - Number Sequencing 3

18. Choose and circle - Greater Number 1

19. Choose and circle - Greater Number 2

20. Write the number - Number Sequencing 4

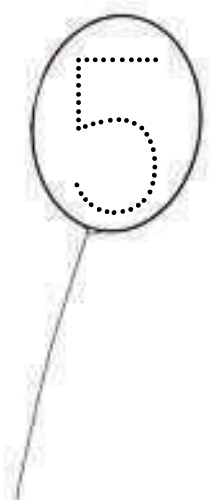
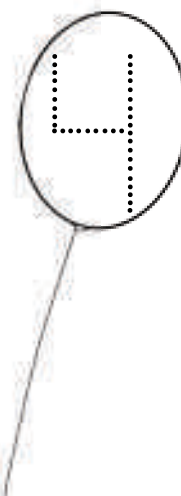
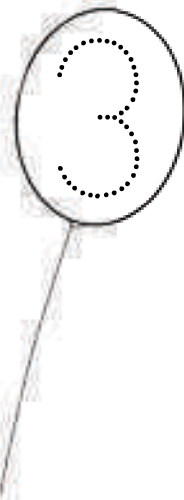


Trace and Compare



Help Chutki match the number written on balloons with the number of children. Draw lines from the balloon with correct number to the head of every child.

Also, trace the numbers given on the balloons.





Complete the Incomplete




Read the numbers and help Bheem write the missing number names in the given space.

Now read the number names and help Bheem write the missing numbers in the given space.

1	<input type="text"/> <input type="text"/> <input type="text"/>
<input type="text"/>	two
<input type="text"/>	three
4	<input type="text"/> <input type="text"/> <input type="text"/>
<input type="text"/>	five
<input type="text"/>	six
7	<input type="text"/> <input type="text"/> <input type="text"/>
<input type="text"/>	eight
9	<input type="text"/> <input type="text"/> <input type="text"/>
<input type="text"/>	ten

<input type="text"/>	one
2	<input type="text"/> <input type="text"/> <input type="text"/>
3	<input type="text"/> <input type="text"/> <input type="text"/>
<input type="text"/>	four
5	<input type="text"/> <input type="text"/> <input type="text"/>
6	<input type="text"/> <input type="text"/> <input type="text"/>
<input type="text"/>	seven
8	<input type="text"/> <input type="text"/> <input type="text"/>
<input type="text"/>	nine
10	<input type="text"/> <input type="text"/> <input type="text"/>



Complete the Incomplete



Read the numbers and help Bheem write the missing number names in the given space.

Now read the number names and help Bheem write the missing numbers in the given space.

11	<div></div> <div></div> <div></div>
----	-------------------------------------

12	<div></div> <div></div> <div></div>
----	-------------------------------------

	thirteen
--	----------

	fourteen
--	----------

15	<div></div> <div></div> <div></div>
----	-------------------------------------

16	<div></div> <div></div> <div></div>
----	-------------------------------------

	seventeen
--	-----------

	eighteen
--	----------

19	<div></div> <div></div> <div></div>
----	-------------------------------------

20	<div></div> <div></div> <div></div>
----	-------------------------------------

	eleven
--	--------

	twelve
--	--------

13	<div></div> <div></div> <div></div>
----	-------------------------------------

14	<div></div> <div></div> <div></div>
----	-------------------------------------

	fifteen
--	---------

	sixteen
--	---------

17	<div></div> <div></div> <div></div>
----	-------------------------------------

18	<div></div> <div></div> <div></div>
----	-------------------------------------

	nineteen
--	----------

	twenty
--	--------

Access 12,000+ expert-designed worksheets

Subscribe Now!

[Explore all Math worksheets](#)